

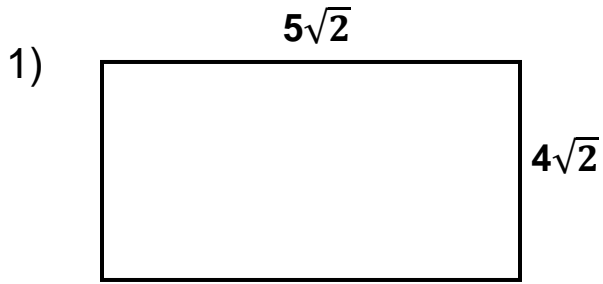
TOPIC 12-1: AREA & PERIMETER OF RECTANGLES & PARALLELOGRAMS

Refer to your fact sheet for the formulas.

Rectangle and Square Examples:

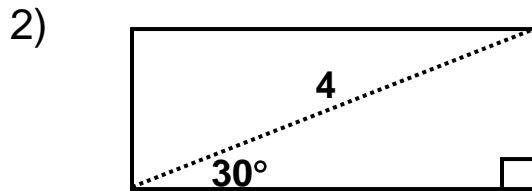
Area = _____

Perimeter = _____



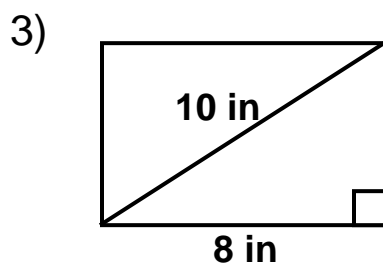
Area = _____

Perimeter = _____



Area = _____

Perimeter = _____



Area = _____

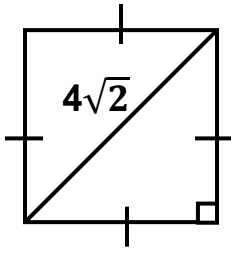
Perimeter = _____

4) A square with a diagonal of 6.

Area = _____

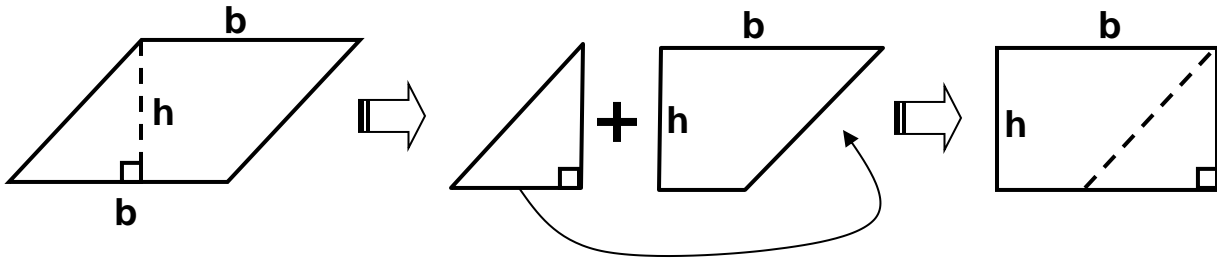
Perimeter = _____

5)



Area = _____

Perimeter = _____

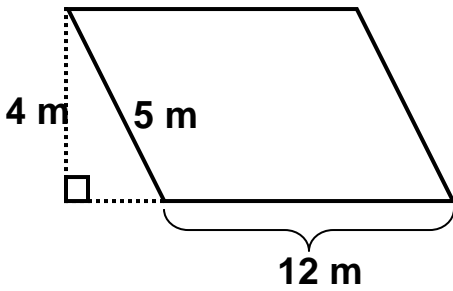


Parallelogram Examples:

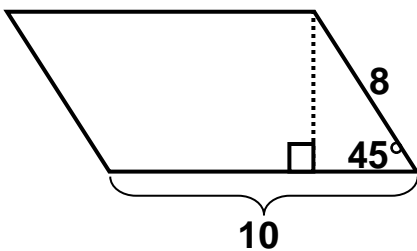
Area = _____

Perimeter = _____

6)



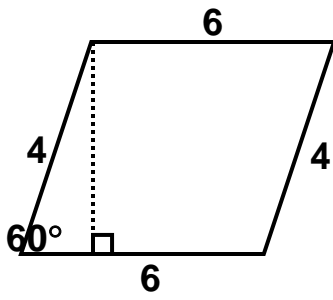
7)



Area = _____

Perimeter = _____

8)



Area = _____

Perimeter = _____

9) Find the perimeter of the parallelogram. **Give an exact answer.**

